

HOME LINK
7•3

Polygons



Family Note We are beginning to identify polygons and their characteristics. A polygon is a closed 2-dimensional figure. It is formed by three or more line segments that meet only at their endpoints.

On this page, your child will try to name the shapes we worked with today. Some of the names may still be confusing.

Please return this Home Link to school tomorrow.

1. Use the Word List to help you write the name of each shape.

Word List

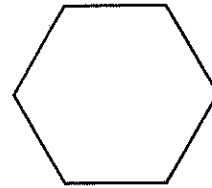
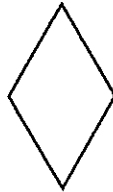

hexagon

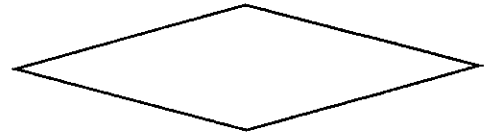
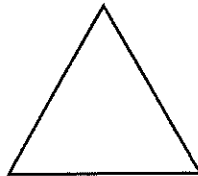

rhombus

square

trapezoid


triangle





Practice

2. Write the fact family for this domino.



_____ + _____ = _____

_____ - _____ = _____

_____ + _____ = _____

_____ - _____ = _____